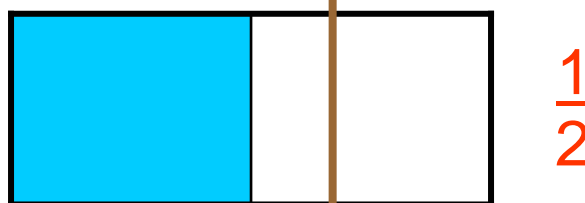


Comparing Fractions

Which fraction is larger?

STEPS:

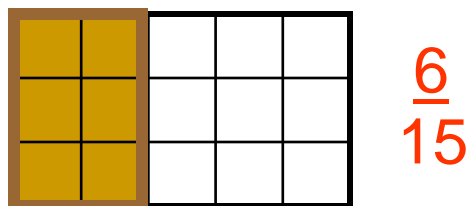
1. Label each fraction.
2. Use the picture to decide which picture has more and less. Draw a line or outline the shaded parts.
3. Write your comparison (answer) both ways.



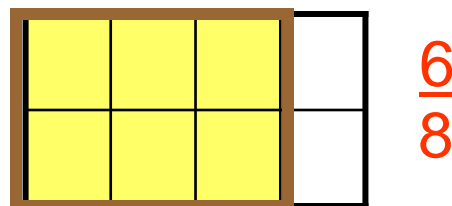
$$\frac{2}{3} > \frac{1}{2} \quad \frac{1}{2} < \frac{2}{3}$$

The alligator always eats the larger amount.

Kelly baked brownies for the class and Jenny baked lemon squares. The picture shows how much dessert each girl has left over to take home. Who has the least amount of dessert to take home?



Kelly's brownies



Jenny's lemon squares

Kelly

$$\frac{6}{8} > \frac{6}{15} \quad \frac{6}{15} < \frac{6}{8}$$

The alligator always eats the larger amount.