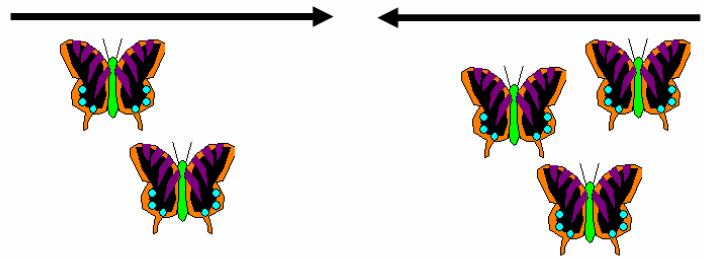


Put Together Addition

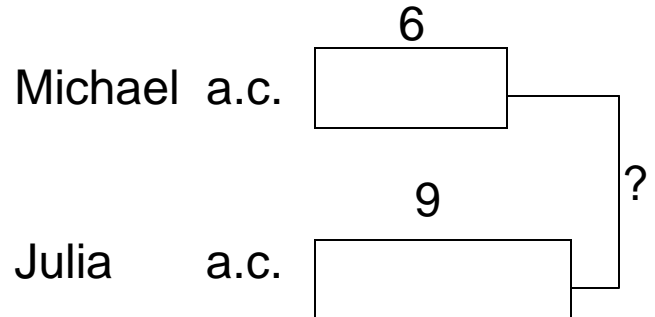


Michael had 6 animal crackers.
Julia had 9 animal crackers.
How many animal crackers
were on the two plates
altogether?

1. Main Idea

Animal crackers
altogether

2. Who, What, Unit Bar




3. Solve

$$\begin{array}{r} 6 \\ + 9 \\ \hline 15 \end{array}$$

4. How

I added 6 and 9.

Take Away Subtraction



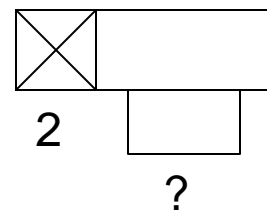
Walter had 8 puppies. Dylan took 2 of the puppies. How many puppies does Walter have now?

1. Main Idea

Walter
puppies

2. Who, What, Unit Bar

Walter puppies 8



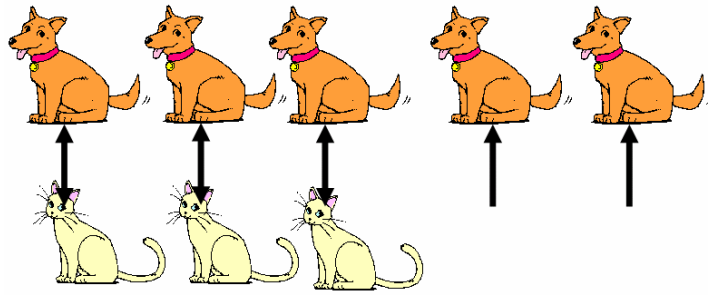
3. Solve

$$\begin{array}{r} 8 \\ - 2 \\ \hline 6 \end{array}$$

4. How

I subtracted 2
from 8.

Compare Subtraction

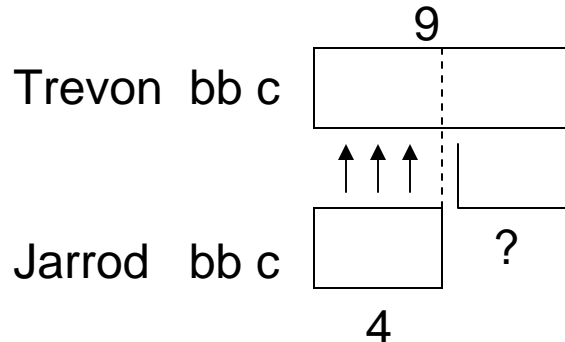


Trevon has 9 baseball cards.
Jarrod has 4 baseball cards.
How many more cards does
Trevon have than Jarrod?

1. Main Idea

How many more cards
Trevon than Jarrod

2. Who, What, Unit Bar




3. Solve

$$\begin{array}{r} 9 \\ - 4 \\ \hline 5 \end{array}$$

4. How

I subtracted 4
from 9.

Missing Part Subtraction



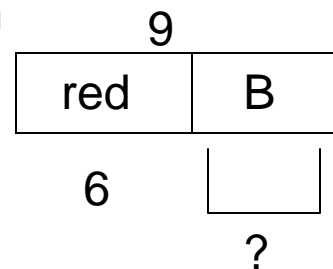
Debbie has 9 fish. They are red fish and blue fish. If there are 6 red fish, how many fish are blue?

1. Main Idea

Blue fish

2. Who, What, Unit Bar

Debbie fish



3. Solve

$$\begin{array}{r} 9 \\ - 6 \\ \hline 3 \end{array}$$

4. How

I subtracted 6 from 9.